



KOTHARI INTERNATIONAL SCHOOL, NOIDA
ACADEMIC SESSION – 2023-2024

Name: _____

Date: _____

Grade & Section: _____

Grade 3
Topic: Concept
Themes 5 and 6:
Diagnostic Recapitulation

Teacher's Feedback:

Q1. Circle the correct answer:

1. Imagine you're a superhero lifting a bag. What special force are you using to make that bag go up, up, and away? Choose the force that makes that bag soar to shoulder heights!



- a) push b) friction c) pull d) gravity

2. A town had a prolonged period of extremely low rainfall, what do we call this serious condition? Identify the term that accurately describes the situation when there's a severe lack of rain for an extended period. _____




- a) famine b) cyclone c) drought d) flood

3. When would a table on the ground move? Choose the situation that best describes when the table would move in a real-life setting.



- a) It will never move b) When a force acts on it
c) When gravity pulls it d) When a big magnet is kept in front of it



4. A piece of land that is surrounded by water from all sides is called _____.

- a) globe b) peninsula c) galaxy d) island



5. A bull uses its _____ force while pulling a cart.

- a) magnetic b) muscular c) motion d) gravitational

6. The change of water vapour into water is called _____

- a) melting b) condensation c) evaporation d) ocean

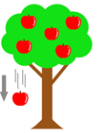


Q2. Match the following:

- | | | |
|----------------------|---------------------------------------|-----|
| 1. Breeze | Antarctic Ocean | () |
| 2. Southern Ocean | required for burning | () |
| 3. Earth | causes increase in the sea level | () |
| 4. Global Warming | gentle and light wind | () |
| 5. Natural disasters | the only planet which supports life | () |
| 6. Oxygen | cause great loss of life and property | () |

Q3. Fill in the blanks:

1. Apple falling from a tree does not fly in the sky but falls on the ground. It is an invisible force that pulls objects towards the earth.




Name the force _____

2. When you rub your hands you must have felt the heat. This is because of force called _____

3. There's a crossing named after an animal which is used by pedestrians to cross the road. Name the crossing. _____ **Crossing.**



4. When heavy rains pour down for days, causing rivers and streams to rise and spread beyond their usual boundaries, we call it _____.



Q4. Look at the road sign and write their name:

(roundabout, speed limit is fifty, bump ahead, two-way traffic)









Q5. State true or false:

1. We should avoid obeying safety rules while travelling. _____
2. The least polluting fuel for vehicles is diesel. _____
3. America is the most populated continent. _____
4. Public transport can be used by all citizens. _____
5. Air is made up of only gases. _____
6. A group of islands that are close together is known as the archipelago. _____

Q6. Give one-word answer:

1. Name of the special vehicle that is used to carry sick people _____.
2. This is worn for safety while driving _____.
3. The layer of air surrounding the earth is called _____.
4. The amount of water vapour present in the air is called _____.
5. The ocean surrounding Asia towards the east is _____.
6. The rod that joins two wheels and make them move is _____

Q7. Answer the following: 2

1. If you were living in an area prone to earthquakes, what are two important things you should remember and do to stay safe during and after the shaking stops?

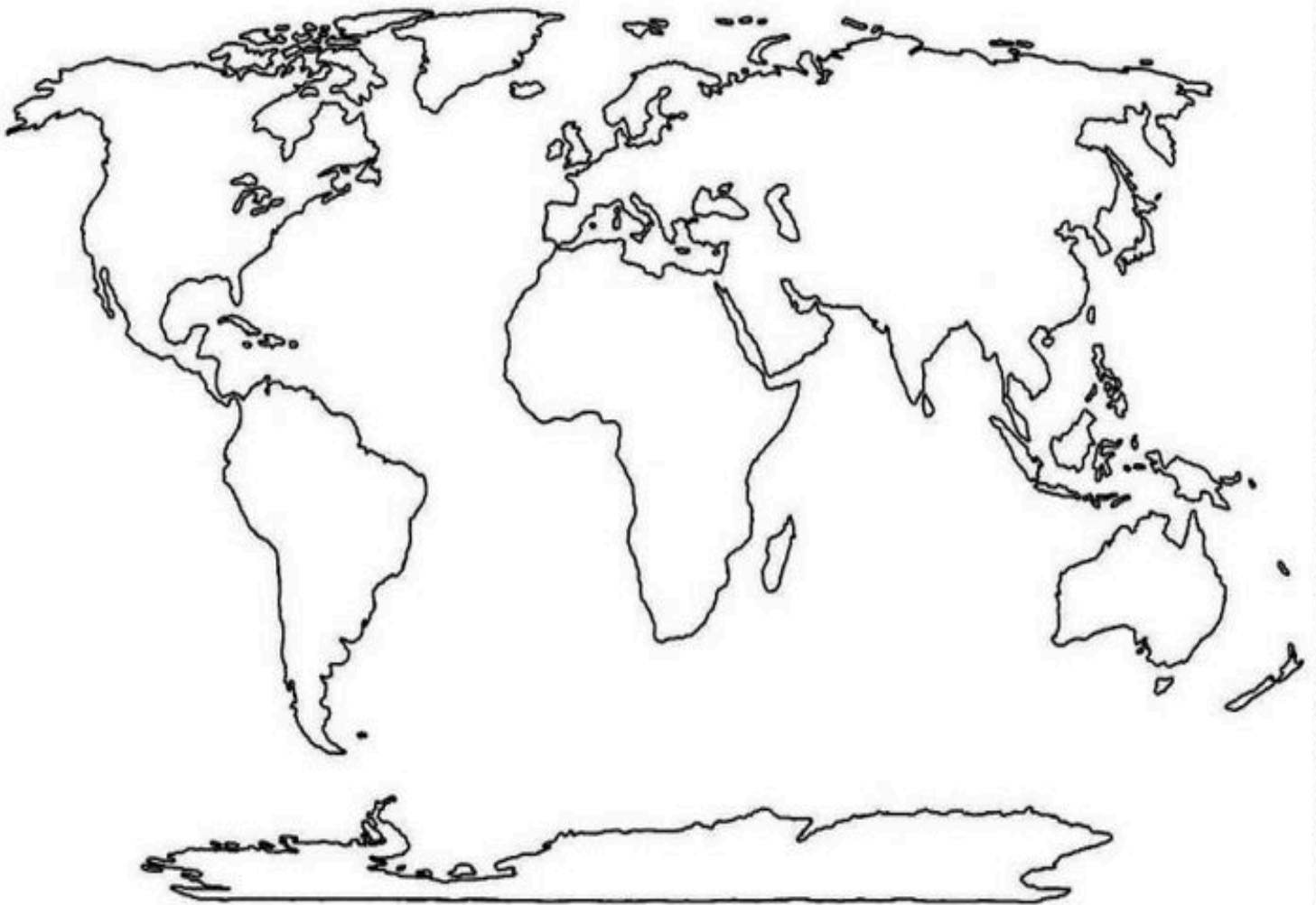


2. Is it easier for you to carry your bag upstairs or come down the stairs? Give a reason why.



Q8. Map Work: Mark the following on the given map:

- a. The largest continent - _____
- b. The ocean surrounding Asia towards east - _____
- c. The smallest continent - _____
- d. The ocean that is also called the Antarctic Ocean- _____



How are you feeling after doing the worksheet? Put a tick mark on one of the smiles below.



Confident

Just OK

I need to revise

